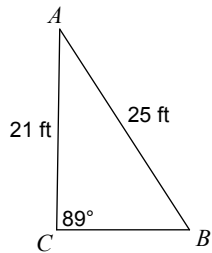
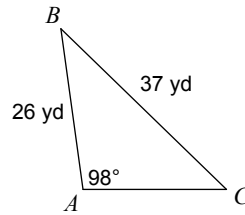
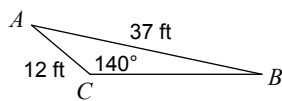
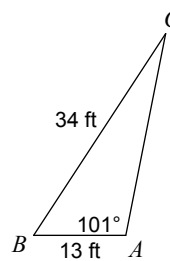
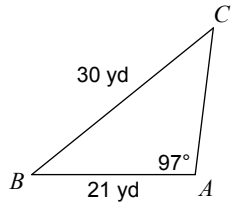
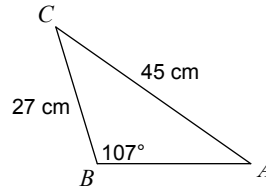
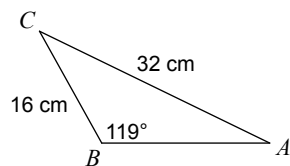
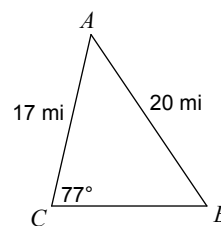
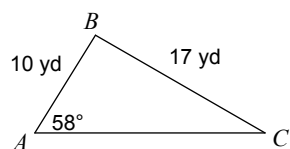
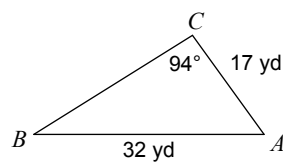


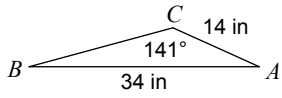
Assignment

Date _____ Period _____

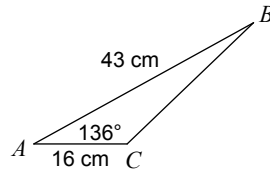
Find each measurement indicated. Round your answers to the nearest tenth.

1) Find $m\angle B$ 2) Find $m\angle C$ 3) Find $m\angle B$ 4) Find $m\angle C$ 5) Find $m\angle C$ 6) Find $m\angle A$ 7) Find $m\angle A$ 8) Find $m\angle B$ 9) Find $m\angle C$ 10) Find $m\angle B$ 

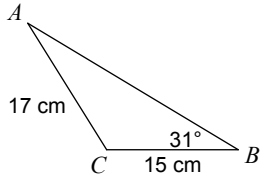
11) Find $m\angle B$



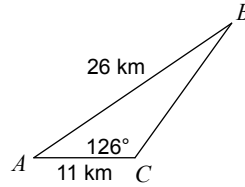
12) Find $m\angle B$



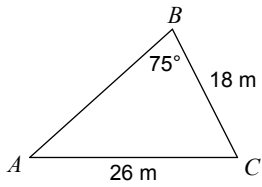
13) Find $m\angle A$



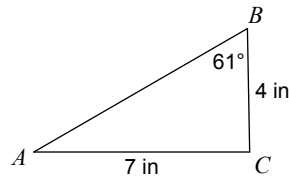
14) Find $m\angle B$



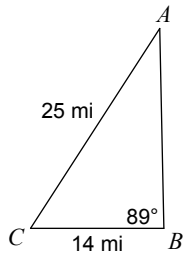
15) Find $m\angle A$



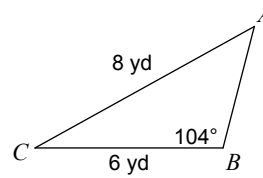
16) Find $m\angle A$



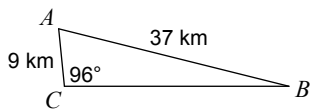
17) Find $m\angle A$



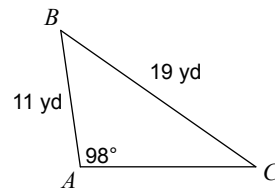
18) Find $m\angle A$



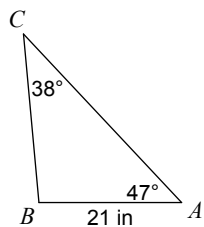
19) Find $m\angle B$



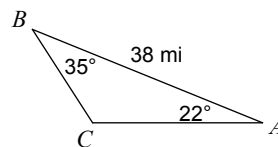
20) Find $m\angle C$



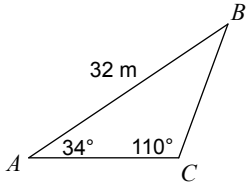
21) Find BC



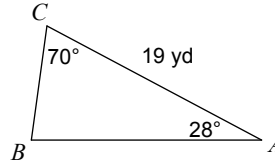
22) Find AC



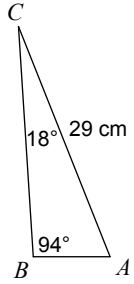
23) Find BC



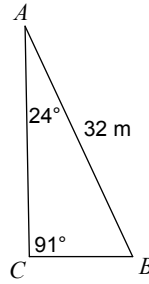
24) Find BC



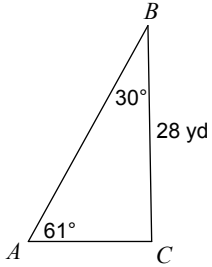
25) Find AB



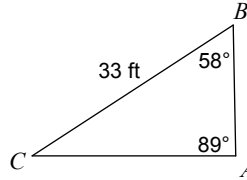
26) Find BC



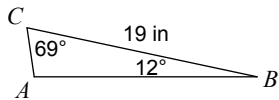
27) Find AC



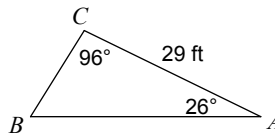
28) Find AC



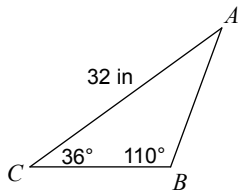
29) Find AB



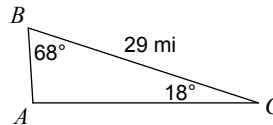
30) Find BC



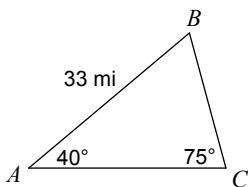
31) Find AB



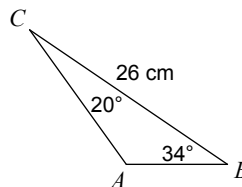
32) Find AB



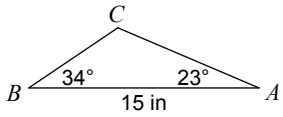
33) Find BC



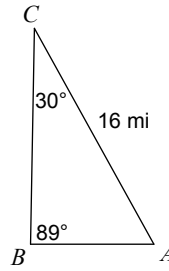
34) Find AB



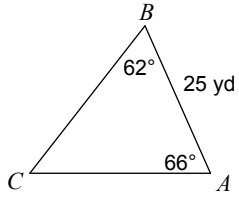
35) Find AC



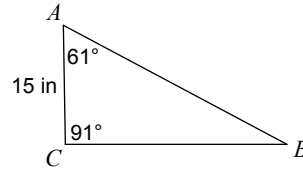
36) Find AB



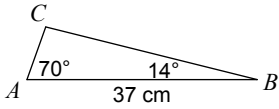
37) Find AC



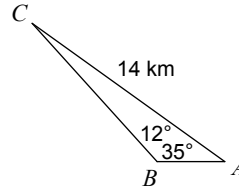
38) Find BC



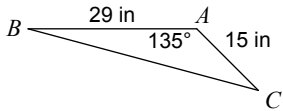
39) Find AC



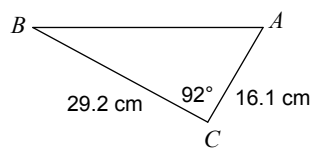
40) Find BC



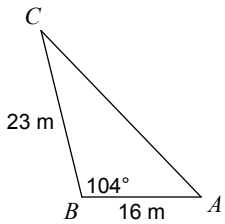
41) Find BC



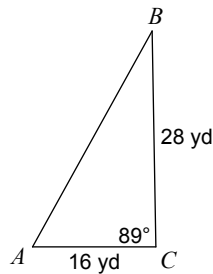
42) Find AB



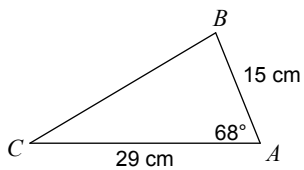
43) Find AC



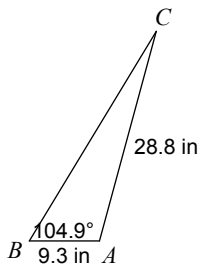
44) Find AB



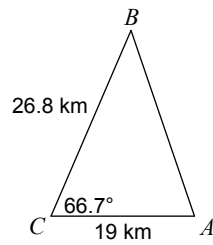
45) Find BC



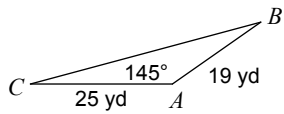
46) Find BC



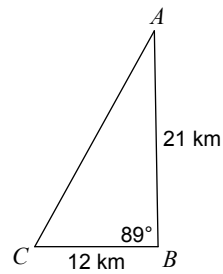
47) Find AB



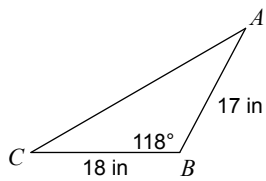
48) Find BC



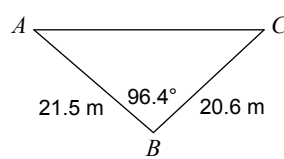
49) Find AC



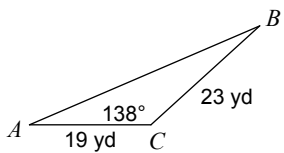
50) Find AC



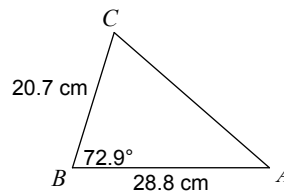
51) Find AC



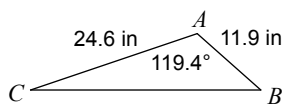
52) Find AB



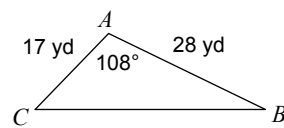
53) Find AC



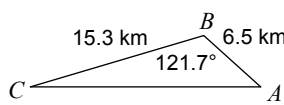
54) Find BC



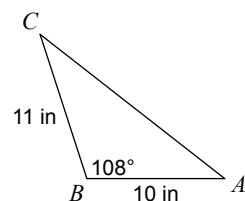
55) Find BC



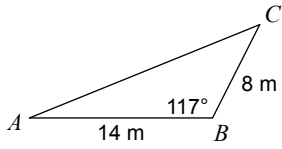
56) Find AC



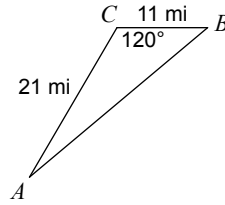
57) Find AC



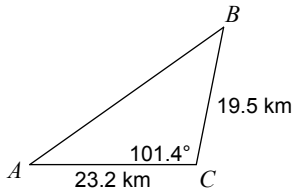
58) Find AC



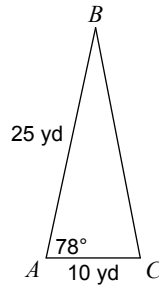
59) Find AB



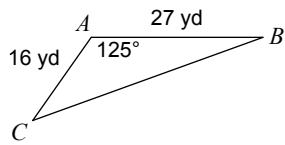
60) Find AB



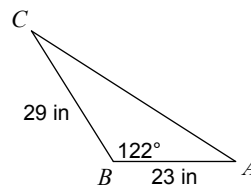
61) Find $m\angle B$



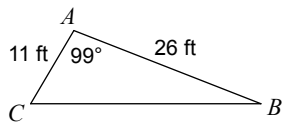
62) Find $m\angle B$



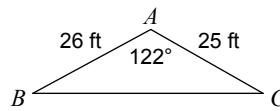
63) Find $m\angle C$



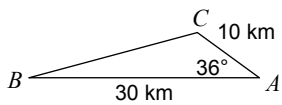
64) Find $m\angle B$



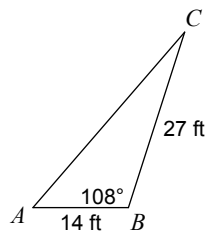
65) Find $m\angle B$



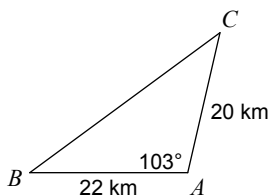
66) Find $m\angle B$



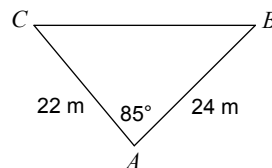
67) Find $m\angle C$



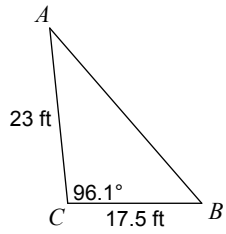
68) Find $m\angle B$



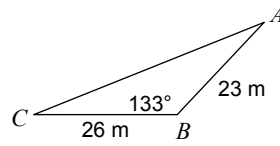
69) Find $m\angle B$



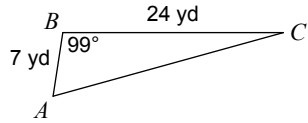
70) Find $m\angle A$



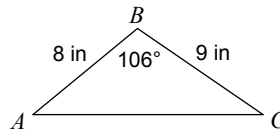
71) Find $m\angle C$



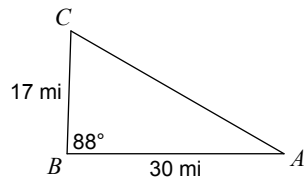
72) Find $m\angle C$



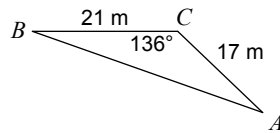
73) Find $m\angle C$



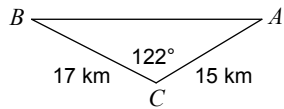
74) Find $m\angle C$



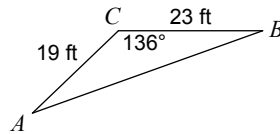
75) Find $m\angle A$



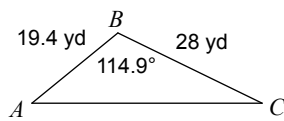
76) Find $m\angle A$



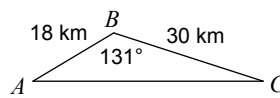
77) Find $m\angle A$



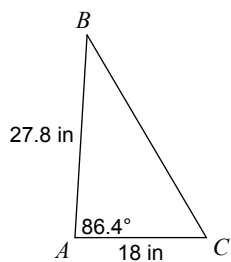
78) Find $m\angle C$



79) Find $m\angle C$



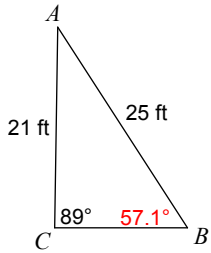
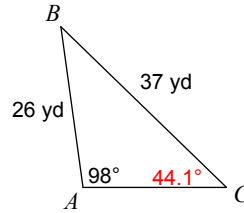
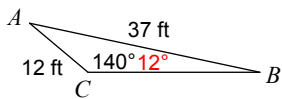
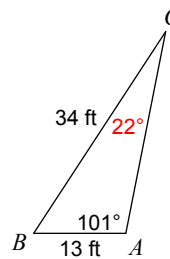
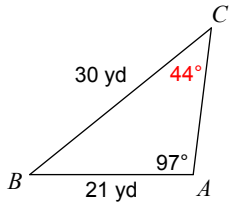
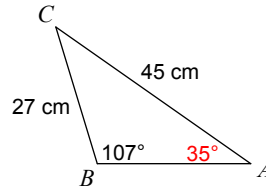
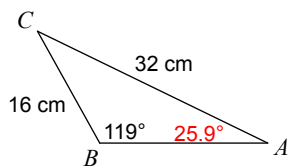
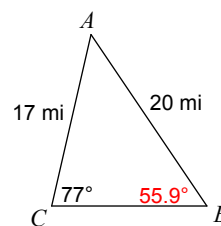
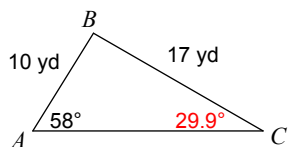
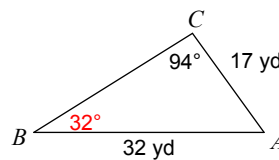
80) Find $m\angle B$



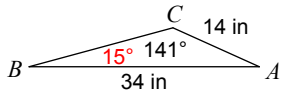
Assignment

Date _____ Period _____

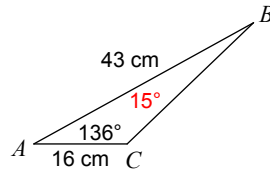
Find each measurement indicated. Round your answers to the nearest tenth.

1) Find $m\angle B$ 2) Find $m\angle C$ 3) Find $m\angle B$ 4) Find $m\angle C$ 5) Find $m\angle C$ 6) Find $m\angle A$ 7) Find $m\angle A$ 8) Find $m\angle B$ 9) Find $m\angle C$ 10) Find $m\angle B$ 

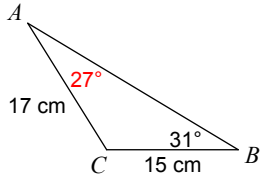
11) Find $m\angle B$



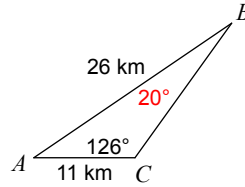
12) Find $m\angle B$



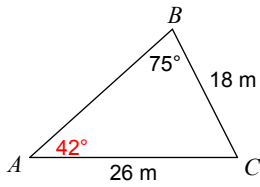
13) Find $m\angle A$



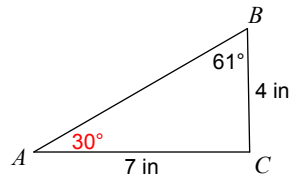
14) Find $m\angle B$



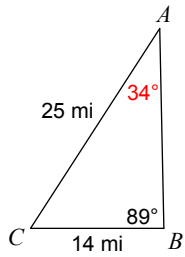
15) Find $m\angle A$



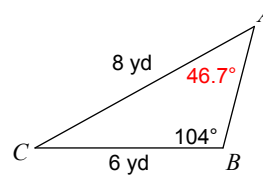
16) Find $m\angle A$



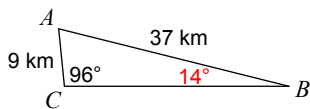
17) Find $m\angle A$



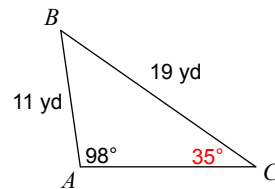
18) Find $m\angle A$



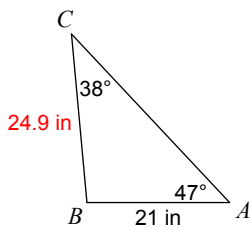
19) Find $m\angle B$



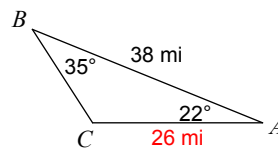
20) Find $m\angle C$



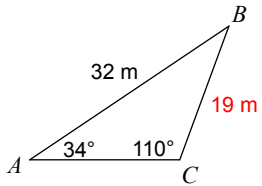
21) Find BC



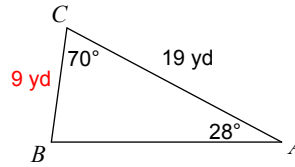
22) Find AC



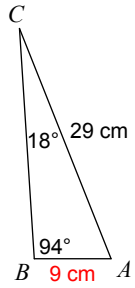
23) Find BC



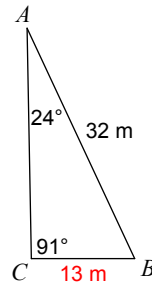
24) Find BC



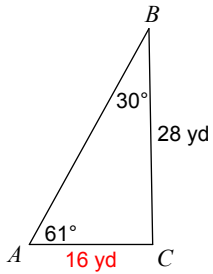
25) Find AB



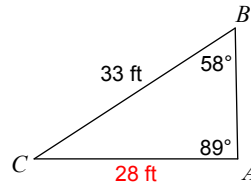
26) Find BC



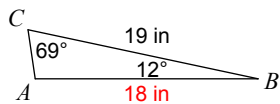
27) Find AC



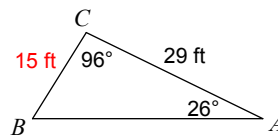
28) Find AC



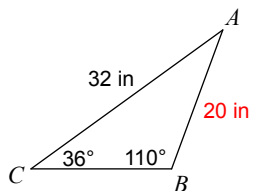
29) Find AB



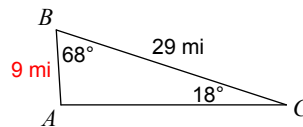
30) Find BC



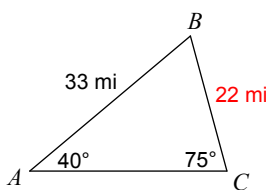
31) Find AB



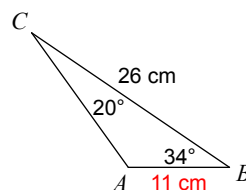
32) Find AB



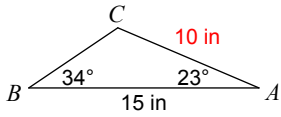
33) Find BC



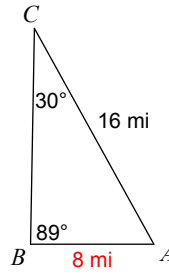
34) Find AB



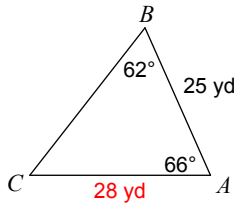
35) Find AC



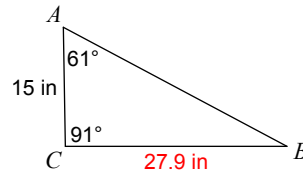
36) Find AB



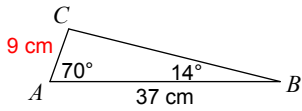
37) Find AC



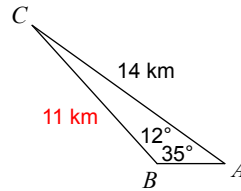
38) Find BC



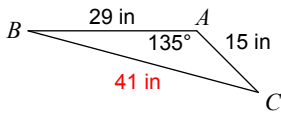
39) Find AC



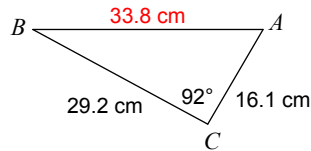
40) Find BC



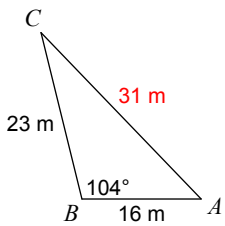
41) Find BC



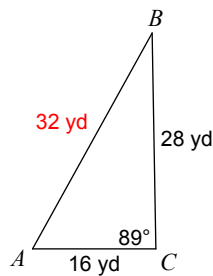
42) Find AB



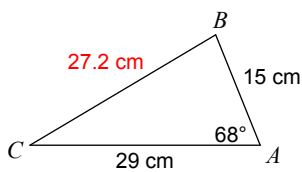
43) Find AC



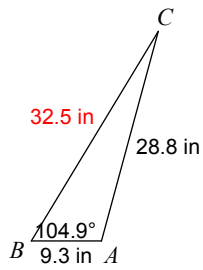
44) Find AB



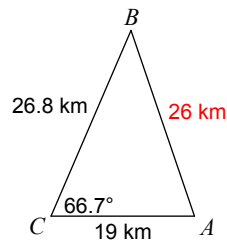
45) Find BC



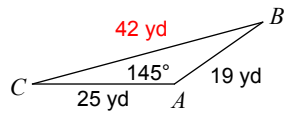
46) Find BC



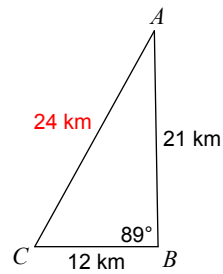
47) Find AB



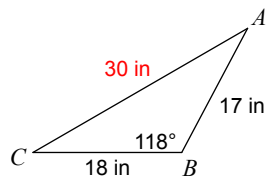
48) Find BC



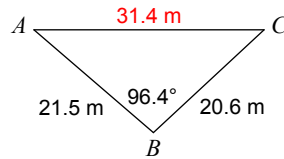
49) Find AC



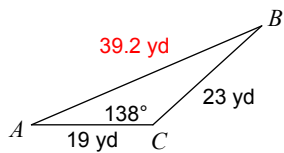
50) Find AC



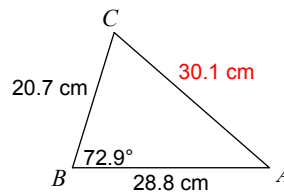
51) Find AC



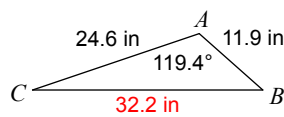
52) Find AB



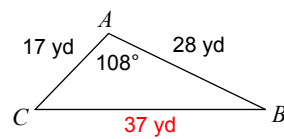
53) Find AC



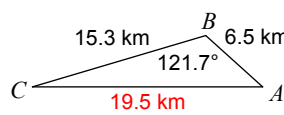
54) Find BC



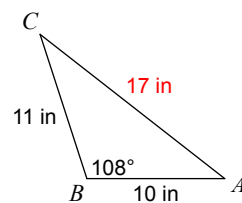
55) Find BC



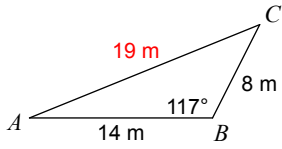
56) Find AC



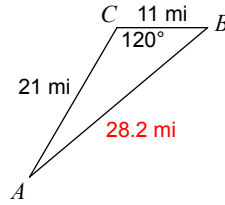
57) Find AC



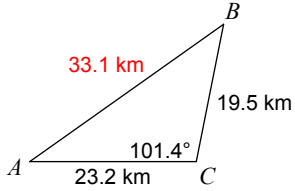
58) Find AC



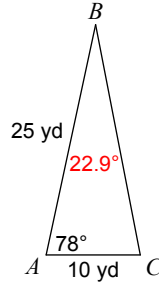
59) Find AB



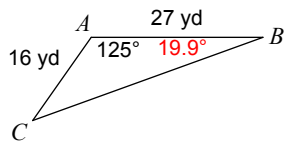
60) Find AB



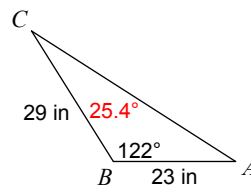
61) Find $m\angle B$



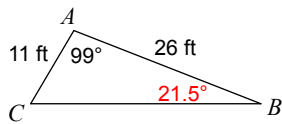
62) Find $m\angle B$



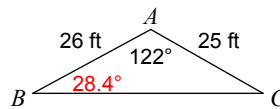
63) Find $m\angle C$



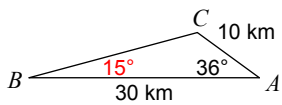
64) Find $m\angle B$



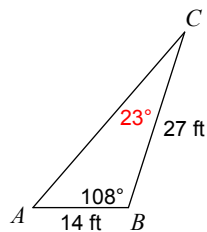
65) Find $m\angle B$



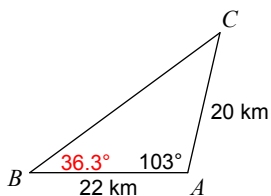
66) Find $m\angle B$



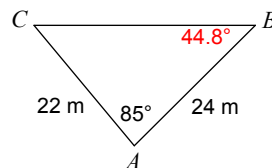
67) Find $m\angle C$



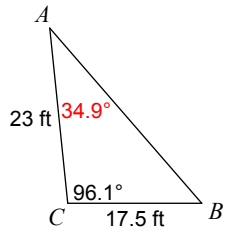
68) Find $m\angle B$



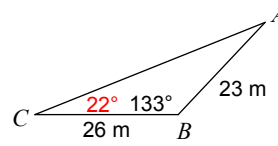
69) Find $m\angle B$



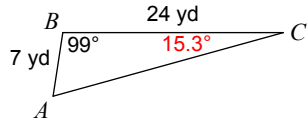
70) Find $m\angle A$



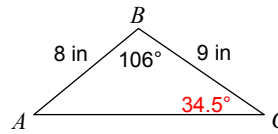
71) Find $m\angle C$



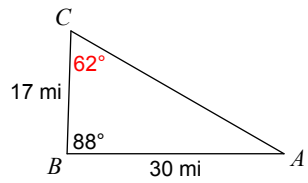
72) Find $m\angle C$



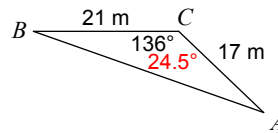
73) Find $m\angle C$



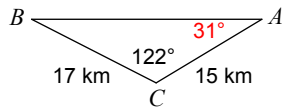
74) Find $m\angle C$



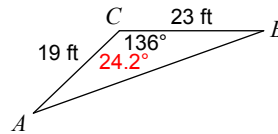
75) Find $m\angle A$



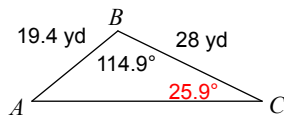
76) Find $m\angle A$



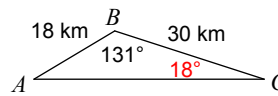
77) Find $m\angle A$



78) Find $m\angle C$



79) Find $m\angle C$



80) Find $m\angle B$

