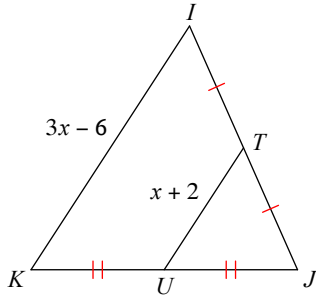


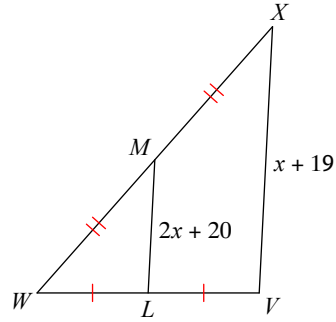
Assignment

Solve for x .

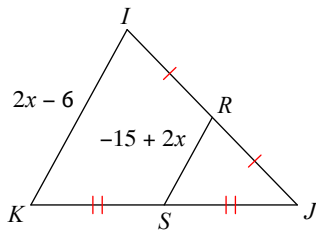
1)



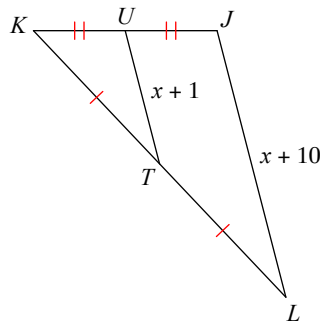
2)



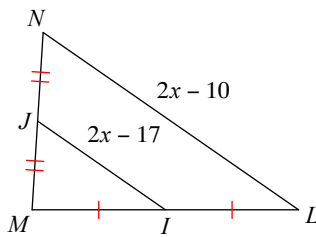
3)



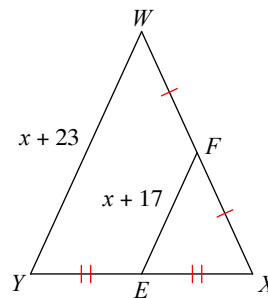
4)



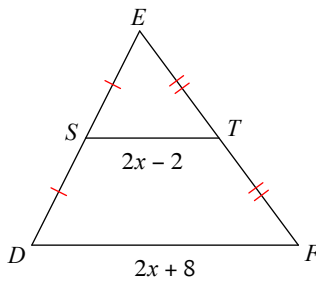
5)



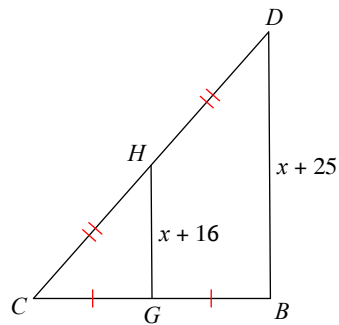
6)



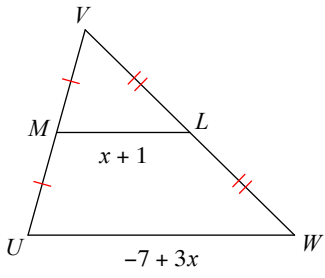
7)



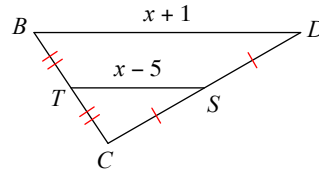
8)



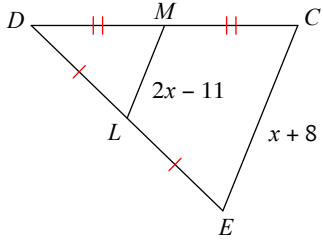
9)



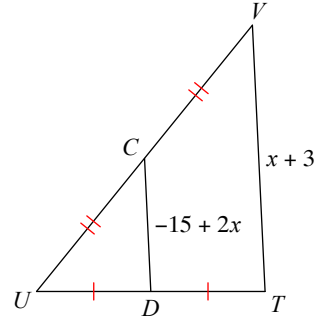
10)



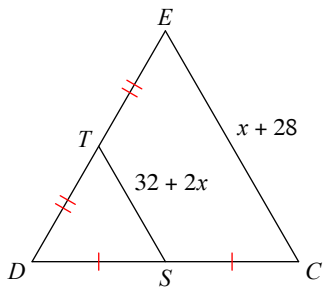
11)



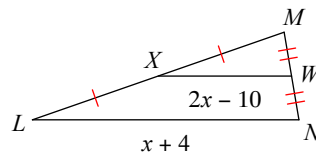
12)



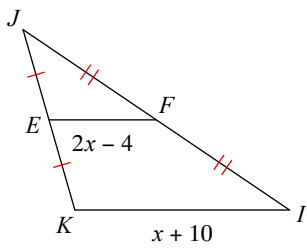
13)



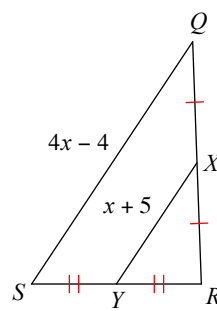
14)



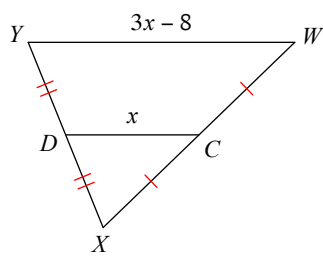
15)



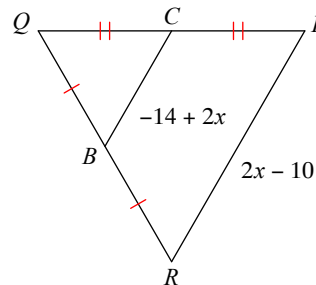
16)



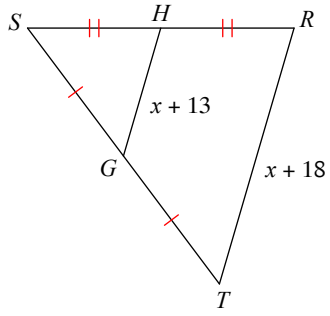
17)



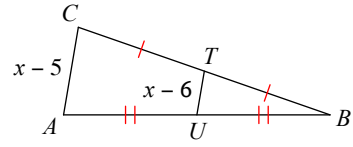
18)



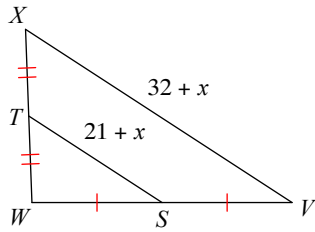
19)



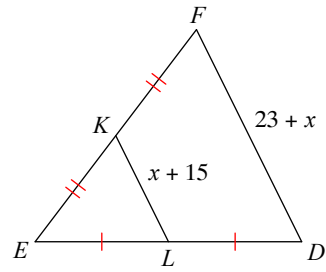
20)



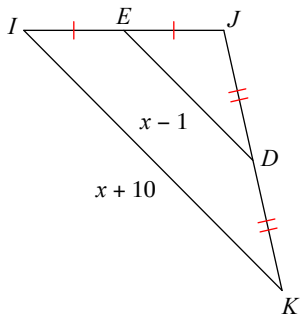
21)



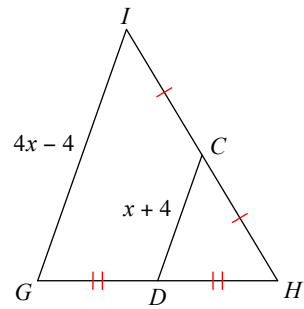
22)



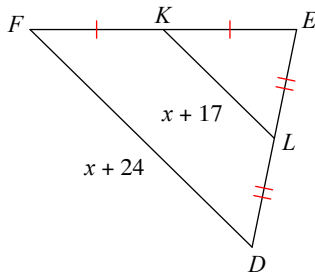
23)



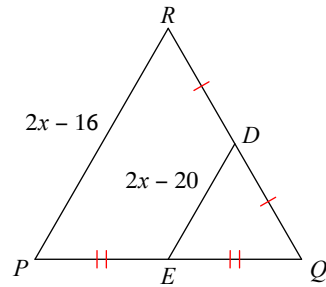
24)



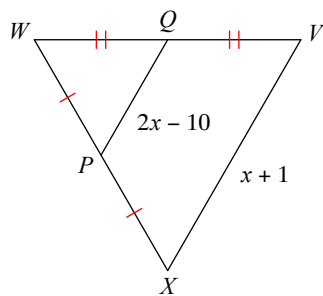
25)



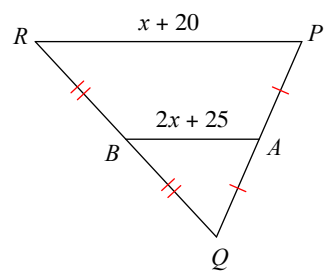
26)



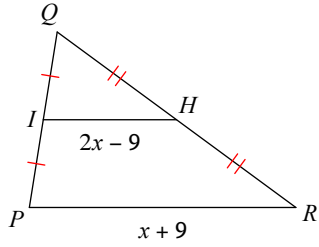
27)



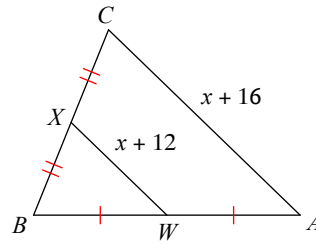
28)



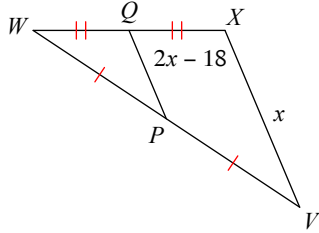
29)



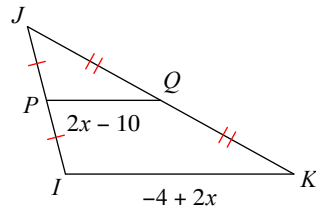
30)



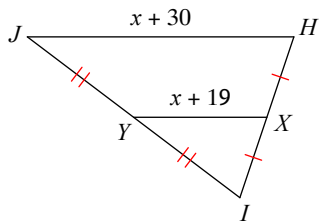
31)



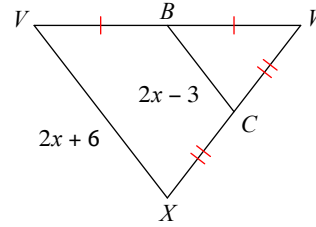
32)



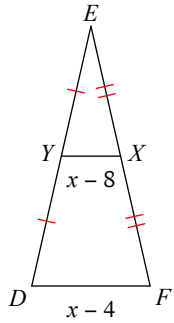
33)



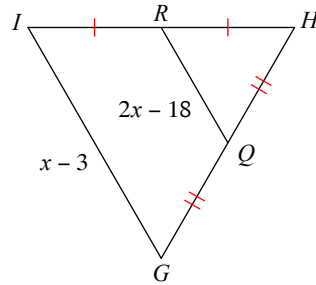
34)



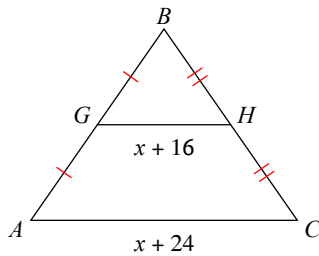
35)



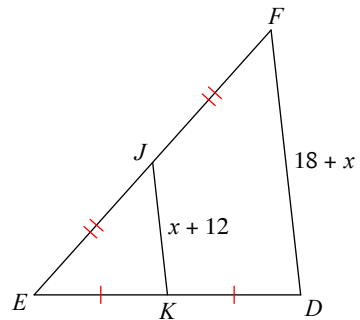
36)



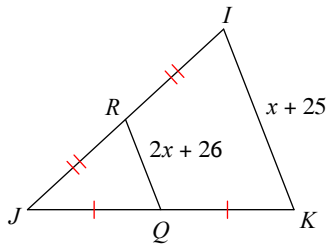
37)



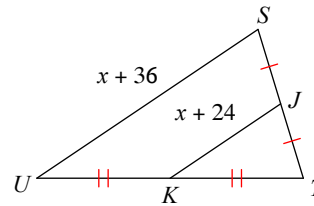
38)



39)



40)



Find the distance between each pair of points. Round your answer to the nearest tenth, if necessary.

41) $(-1, 8), (-4, -1)$

42) $(0, 4), (-1, 2)$

43) $(-7, 5), (-8, 4)$

44) $(-7, -2), (6, 3)$

45) $(-6, -3), (5, 3)$

46) $(1, -5), (-7, 2)$

47) $(3, -7), (2, -8)$

48) $(-4, -3), (6, 7)$

49) $(8, 2), (0, -5)$

50) $(-3, 7), (-8, -3)$

51) $(8, 2), (3, 3)$

52) $(-1, -8), (6, 4)$

53) $(-7, 6), (-2, -6)$

54) $(4, -1), (-4, 7)$

55) $(8, -1), (-4, 7)$

56) $(-5, 0), (-3, 8)$

57) $(7, 1), (8, 7)$

58) $(3, -1), (2, -3)$

59) $(5, -1), (3, 3)$

60) $(-1, 3), (0, 4)$

61) $(2, -3), (-1, 8)$

62) $(7, 8), (-1, 7)$

63) $(2, -7), (1, -3)$

64) $(-2, -5), (8, 8)$

65) $(-8, 6), (0, 2)$

66) $(-3, 7), (4, 1)$

67) $(3, 2), (-2, -5)$

68) $(0, -8), (1, 6)$

$$69) (-8, -2), (1, -3)$$

$$70) (-8, -5), (-6, 6)$$

$$71) (7, 0), (2, 1)$$

$$72) (0, 2), (7, 7)$$

$$73) (1, -3), (0, 1)$$

$$74) (-8, -5), (-7, 2)$$

$$75) (1, 3), (6, 5)$$

$$76) (7, 3), (-6, -2)$$

$$77) (4, 6), (3, -8)$$

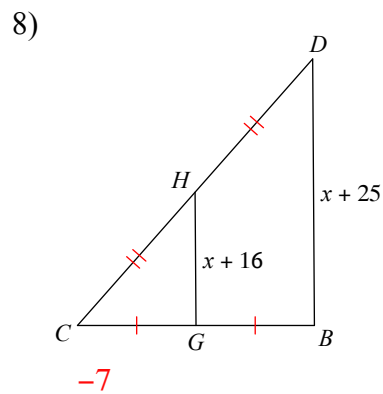
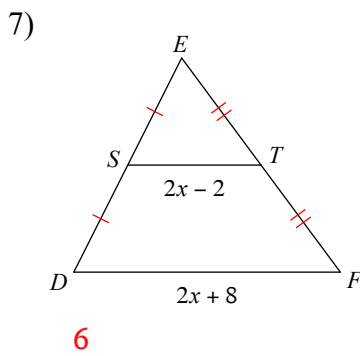
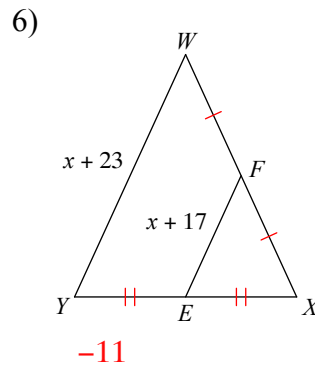
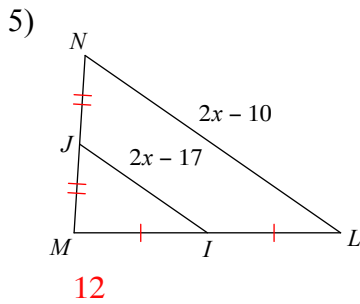
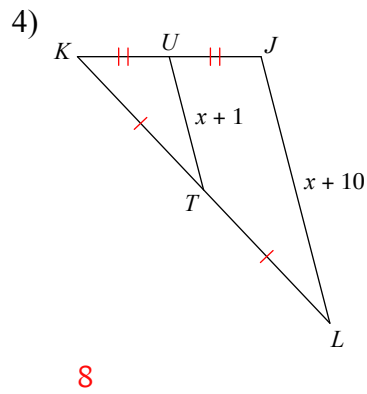
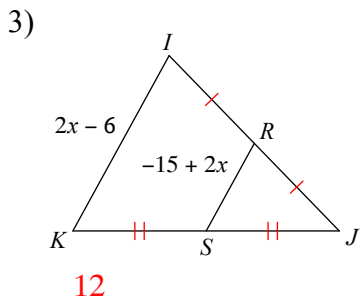
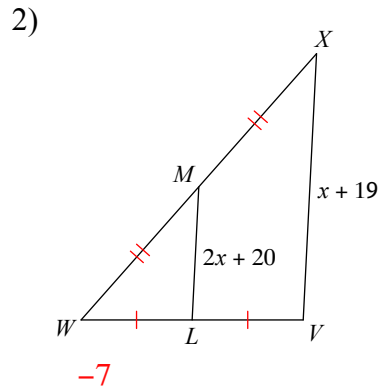
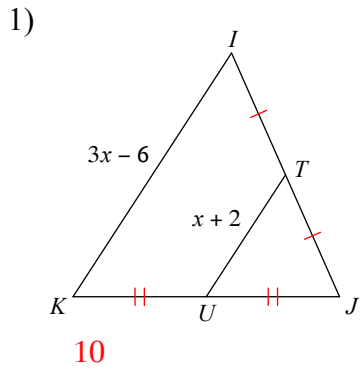
$$78) (-4, -2), (2, 3)$$

$$79) (-1, 2), (5, -4)$$

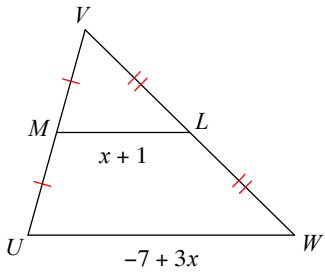
$$80) (-1, 5), (2, 1)$$

Assignment

Solve for x .

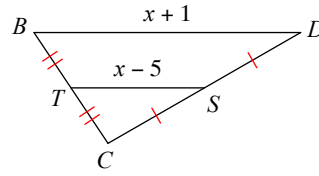


9)



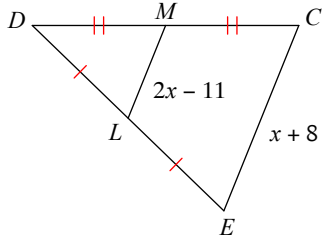
9

10)



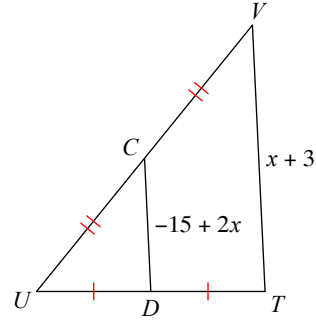
11

11)



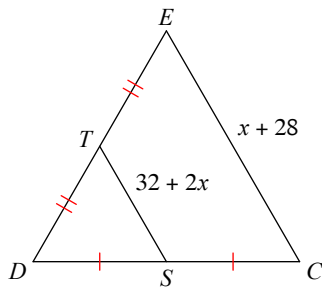
10

12)



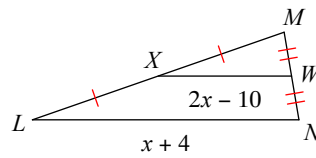
11

13)



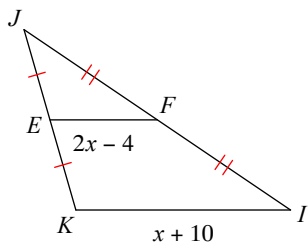
-12

14)



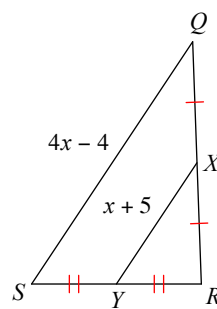
8

15)



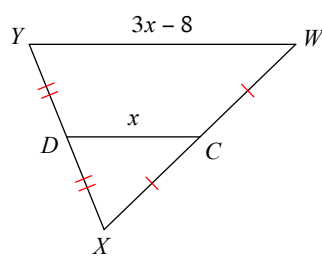
6

16)



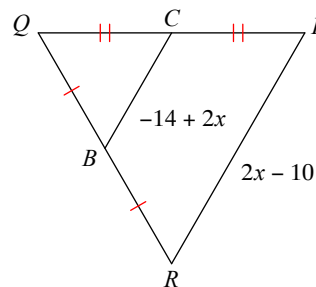
7

17)



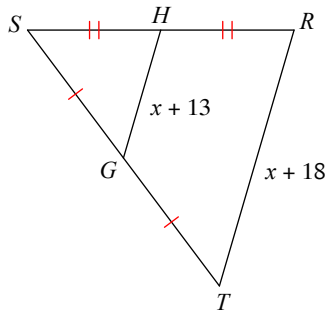
8

18)



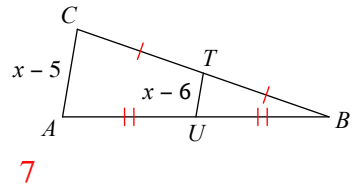
9

19)



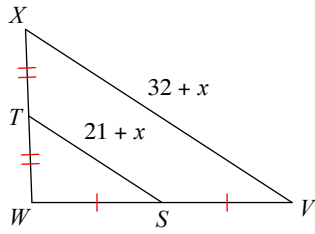
-8

20)



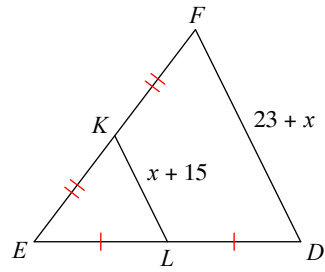
7

21)



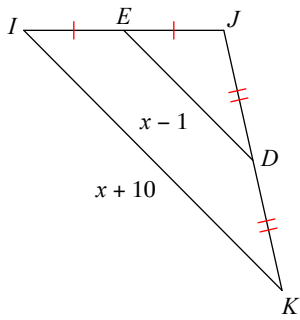
-10

22)



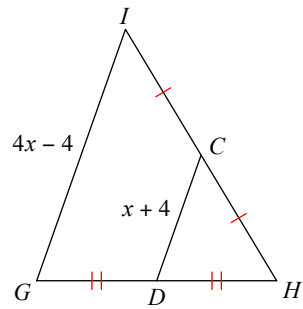
-7

23)



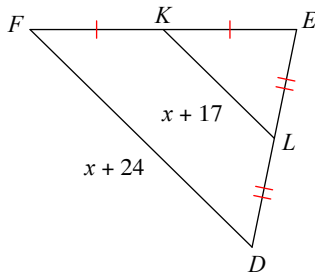
12

24)



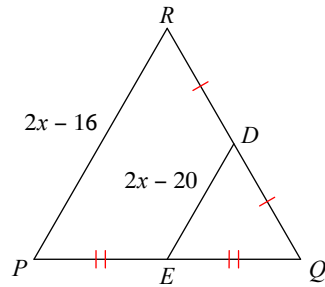
6

25)



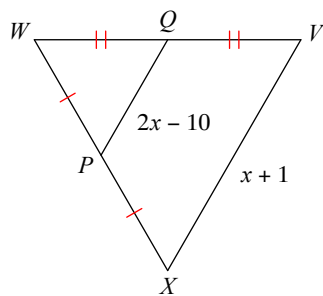
-10

26)



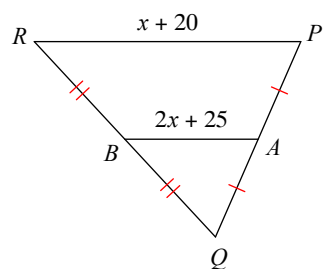
12

27)



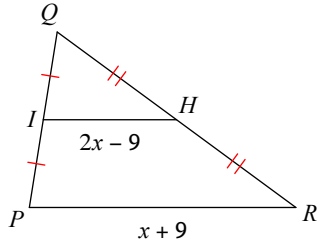
7

28)



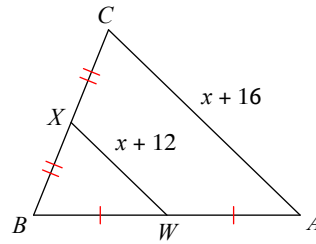
-10

29)



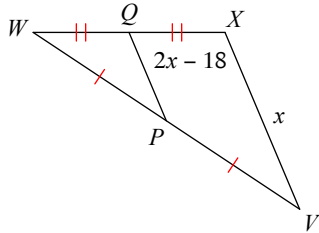
9

30)



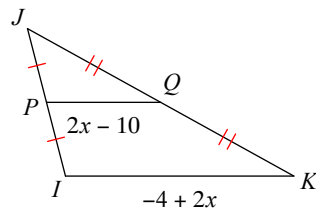
-8

31)



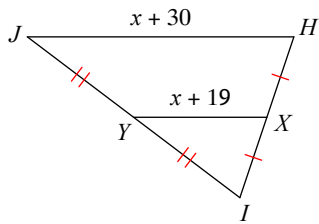
12

32)



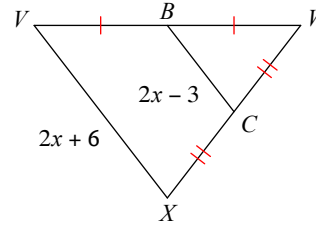
8

33)



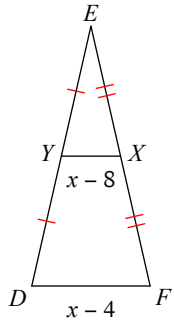
-8

34)



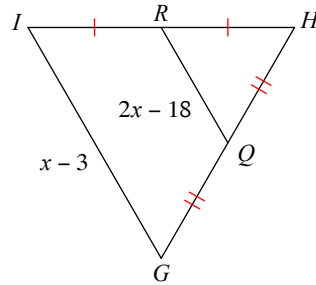
6

35)



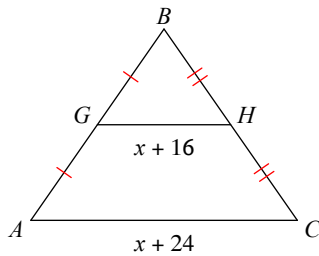
12

36)



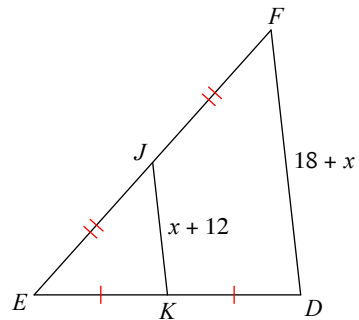
11

37)



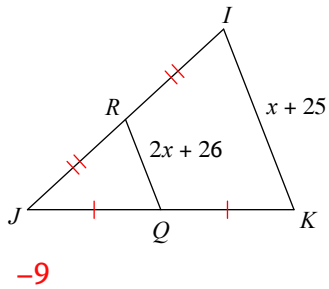
-8

38)

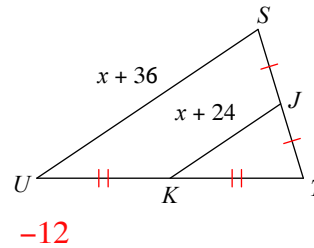


-6

39)



40)



Find the distance between each pair of points. Round your answer to the nearest tenth, if necessary.

41) $(-1, 8), (-4, -1)$

9.5

43) $(-7, 5), (-8, 4)$

1.4

45) $(-6, -3), (5, 3)$

12.5

47) $(3, -7), (2, -8)$

1.4

49) $(8, 2), (0, -5)$

10.6

51) $(8, 2), (3, 3)$

5.1

53) $(-7, 6), (-2, -6)$

13

55) $(8, -1), (-4, 7)$

14.4

57) $(7, 1), (8, 7)$

6.1

59) $(5, -1), (3, 3)$

4.5

61) $(2, -3), (-1, 8)$

11.4

63) $(2, -7), (1, -3)$

4.1

65) $(-8, 6), (0, 2)$

8.9

67) $(3, 2), (-2, -5)$

8.6

42) $(0, 4), (-1, 2)$

2.2

44) $(-7, -2), (6, 3)$

13.9

46) $(1, -5), (-7, 2)$

10.6

48) $(-4, -3), (6, 7)$

14.1

50) $(-3, 7), (-8, -3)$

11.2

52) $(-1, -8), (6, 4)$

13.9

54) $(4, -1), (-4, 7)$

11.3

56) $(-5, 0), (-3, 8)$

8.2

58) $(3, -1), (2, -3)$

2.2

60) $(-1, 3), (0, 4)$

1.4

62) $(7, 8), (-1, 7)$

8.1

64) $(-2, -5), (8, 8)$

16.4

66) $(-3, 7), (4, 1)$

9.2

68) $(0, -8), (1, 6)$

14

69) $(-8, -2), (1, -3)$

9.1

71) $(7, 0), (2, 1)$

5.1

73) $(1, -3), (0, 1)$

4.1

75) $(1, 3), (6, 5)$

5.4

77) $(4, 6), (3, -8)$

14

79) $(-1, 2), (5, -4)$

8.5

70) $(-8, -5), (-6, 6)$

11.2

72) $(0, 2), (7, 7)$

8.6

74) $(-8, -5), (-7, 2)$

7.1

76) $(7, 3), (-6, -2)$

13.9

78) $(-4, -2), (2, 3)$

7.8

80) $(-1, 5), (2, 1)$

5