

Assignment

Date _____ Period _____

Solve each proportion.

1) $\frac{4}{8} = \frac{n}{2}$

2) $\frac{3}{9} = \frac{b}{8}$

3) $\frac{6k}{3} = \frac{5}{9}$

4) $\frac{5}{2} = \frac{6}{x}$

5) $\frac{7}{8} = \frac{5}{n}$

6) $\frac{a}{2} = \frac{2}{4}$

7) $\frac{3}{4} = \frac{n}{9}$

8) $\frac{3}{10} = \frac{n}{2}$

9) $\frac{7}{8} = \frac{n}{5}$

10) $\frac{x}{3} = \frac{4}{2}$

11) $\frac{2}{v} = \frac{9}{10}$

12) $\frac{10}{8} = \frac{2}{x}$

13) $\frac{4}{v} = \frac{9}{6}$

14) $\frac{b}{3} = \frac{5}{10}$

15) $\frac{v}{2} = \frac{9}{4}$

16) $\frac{x}{9} = \frac{3}{2}$

17) $\frac{10}{7} = \frac{n}{2}$

18) $\frac{7}{x} = \frac{6}{7}$

19) $\frac{b}{10} = \frac{8}{5}$

20) $\frac{8}{4} = \frac{4}{10v}$

21) $\frac{7}{x-8} = \frac{4}{8}$

22) $\frac{7}{2} = \frac{4}{n+2}$

23) $\frac{3}{4} = \frac{x-6}{8}$

24) $\frac{3}{6} = \frac{9}{p-7}$

25) $\frac{a+6}{2} = \frac{2}{4}$

26) $\frac{x-3}{7} = \frac{10}{4}$

27) $\frac{7}{3} = \frac{9}{r-7}$

28) $\frac{3}{2} = \frac{n-8}{5}$

29) $\frac{6}{8} = \frac{4}{m-6}$

30) $\frac{3}{8} = \frac{6}{a-1}$

31) $\frac{n+4}{2} = \frac{10}{7}$

32) $\frac{8}{10} = \frac{7}{p+8}$

33) $\frac{4}{n+2} = \frac{10}{2}$

34) $\frac{10}{9} = \frac{7}{n+10}$

35) $\frac{5}{2} = \frac{4}{k+10}$

36) $\frac{10}{7} = \frac{r-3}{10}$

37) $\frac{5}{2} = \frac{x+4}{6}$

38) $\frac{5}{4} = \frac{n-4}{3}$

39) $\frac{7}{x+9} = \frac{4}{10}$

40) $\frac{3}{8} = \frac{2}{n+9}$

41) $\frac{4}{p} = \frac{5}{p-4}$

42) $\frac{x}{x-10} = \frac{5}{6}$

43) $\frac{9}{x+6} = \frac{2}{x}$

44) $\frac{v}{v+1} = \frac{4}{10}$

45) $\frac{x-4}{2} = \frac{x}{3}$

46) $\frac{6}{3} = \frac{a-4}{a}$

47) $\frac{x-1}{x} = \frac{5}{6}$

48) $\frac{8}{x-9} = \frac{6}{x}$

49) $\frac{5}{p-10} = \frac{9}{5p}$

50) $\frac{6}{2} = \frac{x+5}{x}$

51) $\frac{p-7}{10} = \frac{p}{4}$

52) $\frac{7}{k} = \frac{4}{k-2}$

53) $\frac{x+1}{9} = \frac{x}{8}$

54) $\frac{5}{x-7} = \frac{9}{x}$

55) $\frac{3}{8} = \frac{x+9}{x}$

56) $\frac{x}{8} = \frac{x+9}{9}$

57) $\frac{n+3}{7} = \frac{n}{4}$

58) $\frac{4}{x} = \frac{10}{x-9}$

59) $\frac{x-5}{8} = \frac{x}{5}$

60) $\frac{10}{v+9} = \frac{7}{v}$

61) $\frac{b+3}{b+8} = \frac{2}{4}$

62) $\frac{r+4}{r+6} = \frac{7}{8}$

63) $\frac{v+9}{v-8} = \frac{9}{6}$

64) $\frac{k+9}{7} = \frac{k+10}{3}$

65) $\frac{r-4}{r-8} = \frac{10}{9}$

66) $\frac{2}{6} = \frac{p+5}{p-5}$

67) $\frac{7}{v+6} = \frac{5}{v+8}$

68) $\frac{n+10}{10} = \frac{n-8}{7}$

69) $\frac{x-7}{x-8} = \frac{7}{3}$

70) $\frac{8}{x+4} = \frac{9}{x+7}$

71) $\frac{4}{p+10} = \frac{9}{p-10}$

72) $\frac{9}{n-2} = \frac{8}{n-3}$

73) $\frac{2}{4} = \frac{n+8}{n-8}$

74) $\frac{x-6}{x-1} = \frac{9}{4}$

$$75) \frac{r-7}{r-2} = \frac{2}{10}$$

$$76) \frac{3}{6} = \frac{r-6}{r-5}$$

$$77) \frac{p+7}{3} = \frac{p+7}{4}$$

$$78) \frac{10}{r-8} = \frac{7}{r-7}$$

$$79) \frac{m+4}{m-7} = \frac{5}{2}$$

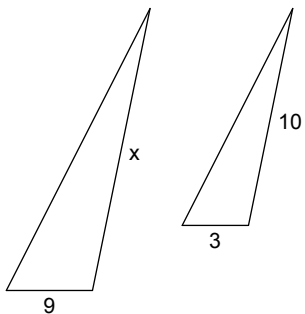
$$80) \frac{n+3}{n+4} = \frac{2}{3}$$

Assignment

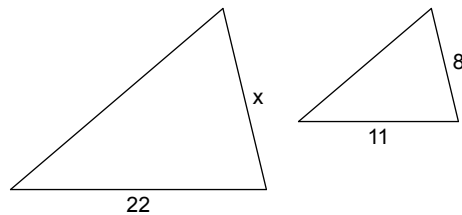
Date _____ Period _____

Each pair of figures is similar. Find the missing side.

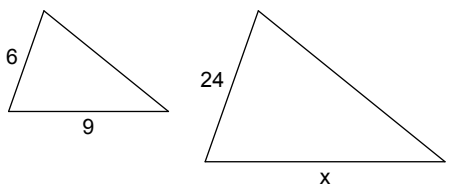
1)



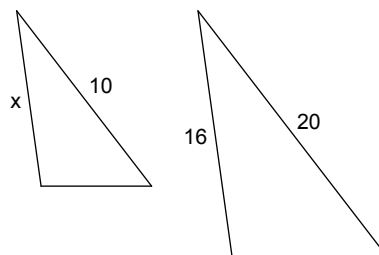
2)



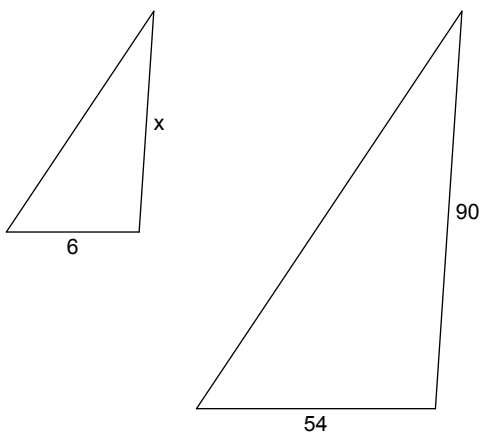
3)



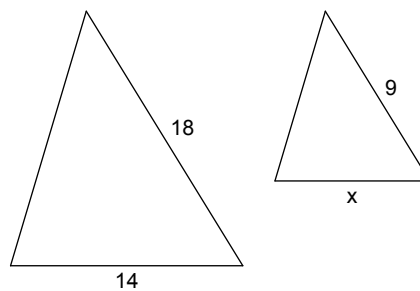
4)



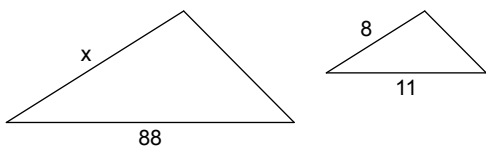
5)



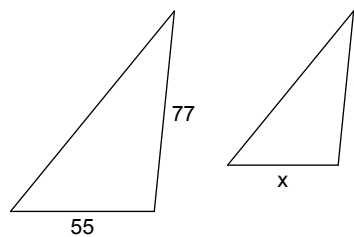
6)



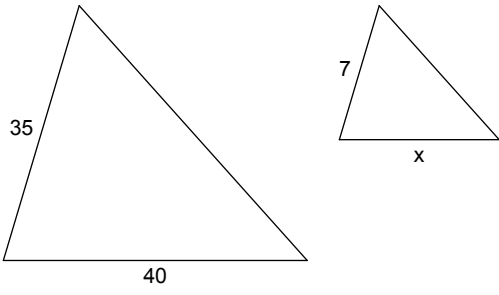
7)



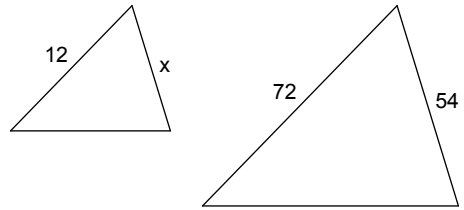
8)



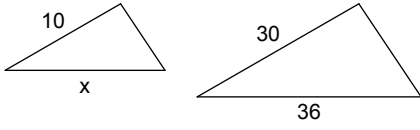
9)



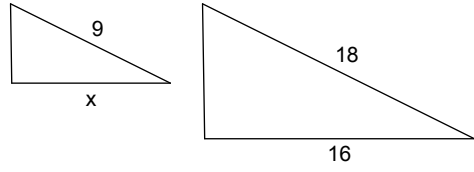
10)



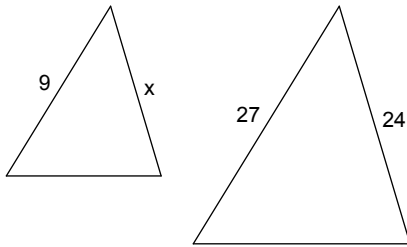
11)



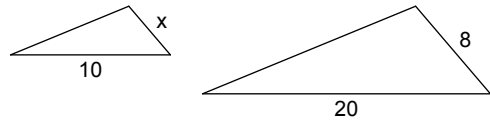
12)



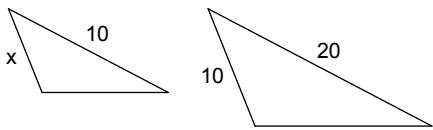
13)



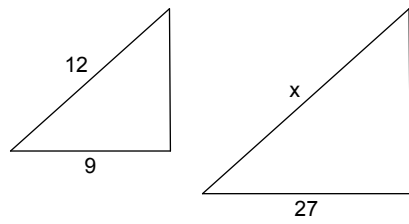
14)



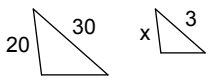
15)



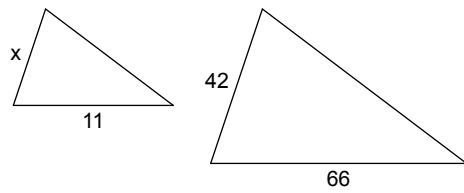
16)



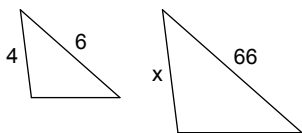
17)



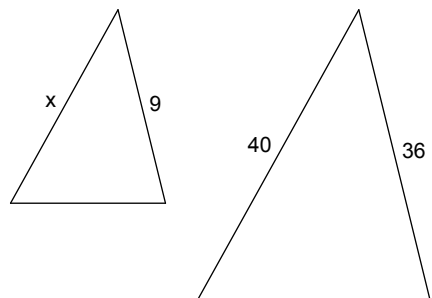
18)



19)



20)



Assignment

Date _____ Period _____

Solve each proportion.

$$1) \frac{4}{8} = \frac{n}{2}$$

$$\{1\}$$

$$2) \frac{3}{9} = \frac{b}{8} \left\{ \frac{8}{3} \right\}$$

$$3) \frac{6k}{3} = \frac{5}{9} \left\{ \frac{5}{18} \right\}$$

$$4) \frac{5}{2} = \frac{6}{x} \left\{ \frac{12}{5} \right\}$$

$$5) \frac{7}{8} = \frac{5}{n} \left\{ \frac{40}{7} \right\}$$

$$6) \frac{a}{2} = \frac{2}{4}$$

$$\{1\}$$

$$7) \frac{3}{4} = \frac{n}{9} \left\{ \frac{27}{4} \right\}$$

$$8) \frac{3}{10} = \frac{n}{2} \left\{ \frac{3}{5} \right\}$$

$$9) \frac{7}{8} = \frac{n}{5} \left\{ \frac{35}{8} \right\}$$

$$10) \frac{x}{3} = \frac{4}{2}$$

$$\{6\}$$

$$11) \frac{2}{v} = \frac{9}{10} \left\{ \frac{20}{9} \right\}$$

$$12) \frac{10}{8} = \frac{2}{x} \left\{ \frac{8}{5} \right\}$$

$$13) \frac{4}{v} = \frac{9}{6} \left\{ \frac{8}{3} \right\}$$

$$14) \frac{b}{3} = \frac{5}{10} \left\{ \frac{3}{2} \right\}$$

$$15) \frac{v}{2} = \frac{9}{4} \left\{ \frac{9}{2} \right\}$$

$$16) \frac{x}{9} = \frac{3}{2} \left\{ \frac{27}{2} \right\}$$

$$17) \frac{10}{7} = \frac{n}{2} \left\{ \frac{20}{7} \right\}$$

$$18) \frac{7}{x} = \frac{6}{7} \left\{ \frac{49}{6} \right\}$$

$$19) \frac{b}{10} = \frac{8}{5}$$

$$\{16\}$$

$$20) \frac{8}{4} = \frac{4}{10v} \left\{ \frac{1}{5} \right\}$$

$$21) \frac{7}{x-8} = \frac{4}{8}$$

$$\{22\}$$

$$22) \frac{7}{2} = \frac{4}{n+2} \left\{ -\frac{6}{7} \right\}$$

$$23) \frac{3}{4} = \frac{x-6}{8}$$

{12}

$$25) \frac{a+6}{2} = \frac{2}{4}$$

{-5}

$$27) \frac{7}{3} = \frac{9}{r-7}$$

{ $\frac{76}{7}$ }

$$29) \frac{6}{8} = \frac{4}{m-6}$$

{ $\frac{34}{3}$ }

$$31) \frac{n+4}{2} = \frac{10}{7}$$

{ $-\frac{8}{7}$ }

$$33) \frac{4}{n+2} = \frac{10}{2}$$

{ $-\frac{6}{5}$ }

$$35) \frac{5}{2} = \frac{4}{k+10}$$

{ $-\frac{42}{5}$ }

$$37) \frac{5}{2} = \frac{x+4}{6}$$

{11}

$$39) \frac{7}{x+9} = \frac{4}{10}$$

{ $\frac{17}{2}$ }

$$41) \frac{4}{p} = \frac{5}{p-4}$$

{-16}

$$43) \frac{9}{x+6} = \frac{2}{x}$$

{ $\frac{12}{7}$ }

$$45) \frac{x-4}{2} = \frac{x}{3}$$

{12}

$$47) \frac{x-1}{x} = \frac{5}{6}$$

{6}

$$24) \frac{3}{6} = \frac{9}{p-7}$$

{25}

$$26) \frac{x-3}{7} = \frac{10}{4}$$

{ $\frac{41}{2}$ }

$$28) \frac{3}{2} = \frac{n-8}{5}$$

{ $\frac{31}{2}$ }

$$30) \frac{3}{8} = \frac{6}{a-1}$$

{17}

$$32) \frac{8}{10} = \frac{7}{p+8}$$

{ $\frac{3}{4}$ }

$$34) \frac{10}{9} = \frac{7}{n+10}$$

{ $-\frac{37}{10}$ }

$$36) \frac{10}{7} = \frac{r-3}{10}$$

{ $\frac{121}{7}$ }

$$38) \frac{5}{4} = \frac{n-4}{3}$$

{ $\frac{31}{4}$ }

$$40) \frac{3}{8} = \frac{2}{n+9}$$

{ $-\frac{11}{3}$ }

$$42) \frac{x}{x-10} = \frac{5}{6}$$

{-50}

$$44) \frac{v}{v+1} = \frac{4}{10}$$

{ $\frac{2}{3}$ }

$$46) \frac{6}{3} = \frac{a-4}{a}$$

{-4}

$$48) \frac{8}{x-9} = \frac{6}{x}$$

{-27}

$$49) \frac{5}{p-10} = \frac{9}{5p} \left\{ -\frac{45}{8} \right\}$$

$$50) \frac{6}{2} = \frac{x+5}{x} \left\{ \frac{5}{2} \right\}$$

$$51) \frac{p-7}{10} = \frac{p}{4} \left\{ -\frac{14}{3} \right\}$$

$$52) \frac{7}{k} = \frac{4}{k-2} \left\{ \frac{14}{3} \right\}$$

$$53) \frac{x+1}{9} = \frac{x}{8} \\ \{8\}$$

$$54) \frac{5}{x-7} = \frac{9}{x} \left\{ \frac{63}{4} \right\}$$

$$55) \frac{3}{8} = \frac{x+9}{x} \left\{ -\frac{72}{5} \right\}$$

$$56) \frac{x}{8} = \frac{x+9}{9} \\ \{72\}$$

$$57) \frac{n+3}{7} = \frac{n}{4} \\ \{4\}$$

$$58) \frac{4}{x} = \frac{10}{x-9} \\ \{-6\}$$

$$59) \frac{x-5}{8} = \frac{x}{5} \left\{ -\frac{25}{3} \right\}$$

$$60) \frac{10}{v+9} = \frac{7}{v} \\ \{21\}$$

$$61) \frac{b+3}{b+8} = \frac{2}{4} \\ \{2\}$$

$$62) \frac{r+4}{r+6} = \frac{7}{8} \\ \{10\}$$

$$63) \frac{v+9}{v-8} = \frac{9}{6} \\ \{42\}$$

$$64) \frac{k+9}{7} = \frac{k+10}{3} \left\{ -\frac{43}{4} \right\}$$

$$65) \frac{r-4}{r-8} = \frac{10}{9} \\ \{44\}$$

$$66) \frac{2}{6} = \frac{p+5}{p-5} \\ \{-10\}$$

$$67) \frac{7}{v+6} = \frac{5}{v+8} \\ \{-13\}$$

$$68) \frac{n+10}{10} = \frac{n-8}{7} \\ \{50\}$$

$$69) \frac{x-7}{x-8} = \frac{7}{3} \left\{ \frac{35}{4} \right\}$$

$$70) \frac{8}{x+4} = \frac{9}{x+7} \\ \{20\}$$

$$71) \frac{4}{p+10} = \frac{9}{p-10} \\ \{-26\}$$

$$72) \frac{9}{n-2} = \frac{8}{n-3} \\ \{11\}$$

$$73) \frac{2}{4} = \frac{n+8}{n-8} \\ \{-24\}$$

$$74) \frac{x-6}{x-1} = \frac{9}{4} \\ \{-3\}$$

$$75) \frac{r-7}{r-2} = \frac{2}{10} \left\{ \frac{33}{4} \right\}$$

$$77) \frac{p+7}{3} = \frac{p+7}{4}$$

$\{-7\}$

$$79) \frac{m+4}{m-7} = \frac{5}{2} \left\{ \frac{43}{3} \right\}$$

$$76) \frac{3}{6} = \frac{r-6}{r-5}$$

$\{7\}$

$$78) \frac{10}{r-8} = \frac{7}{r-7} \left\{ \frac{14}{3} \right\}$$

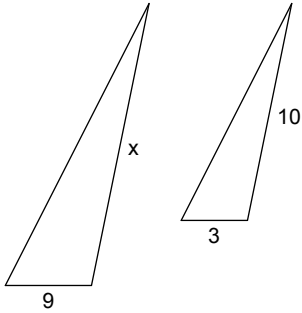
$$80) \frac{n+3}{n+4} = \frac{2}{3}$$

$\{-1\}$

Assignment

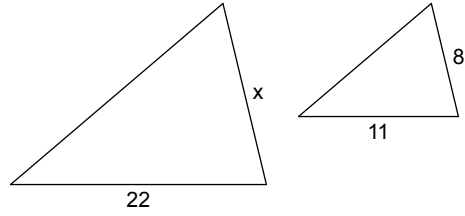
Each pair of figures is similar. Find the missing side.

1)



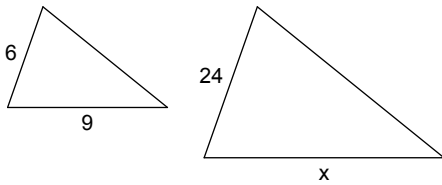
30

2)



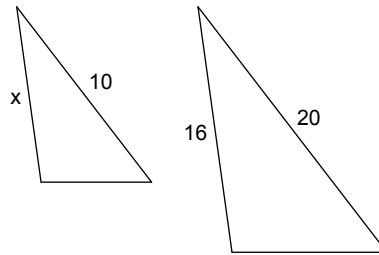
16

3)



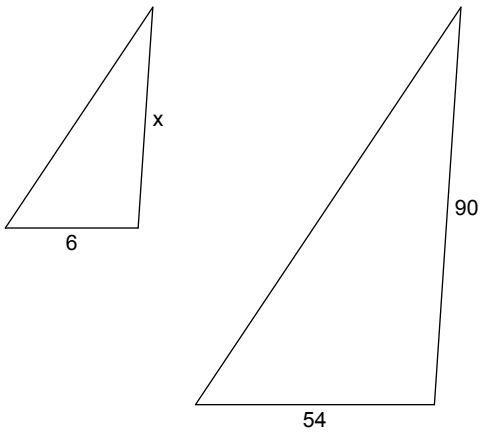
36

4)



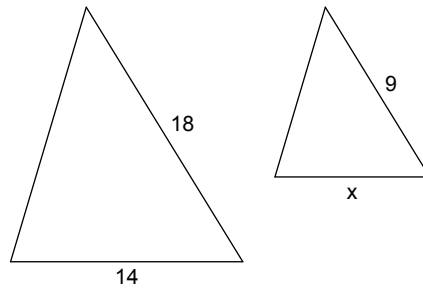
8

5)



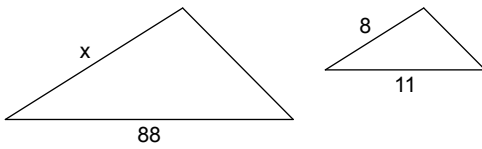
10

6)



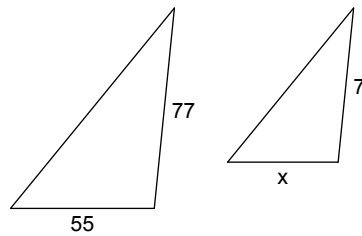
7

7)

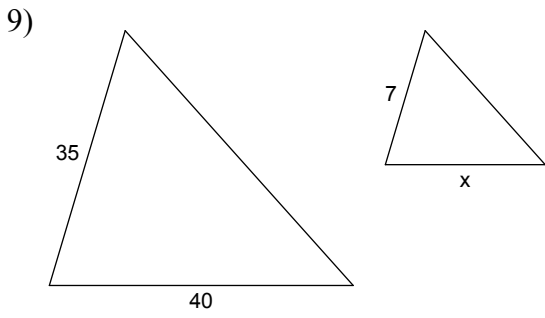


64

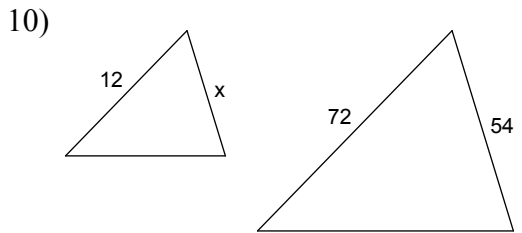
8)



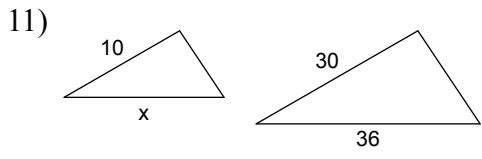
5



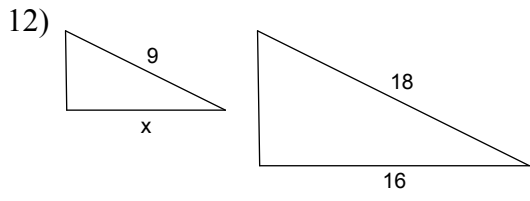
8



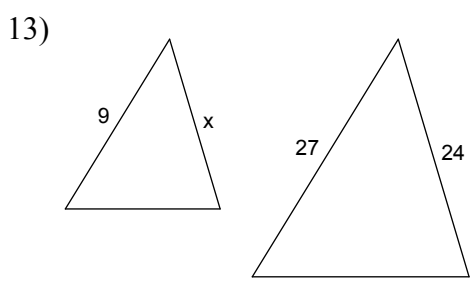
9



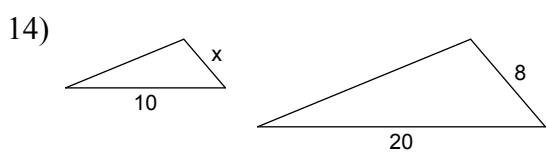
12



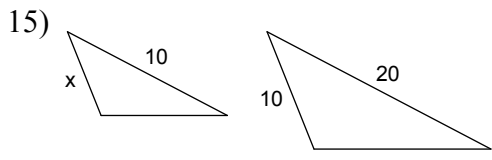
8



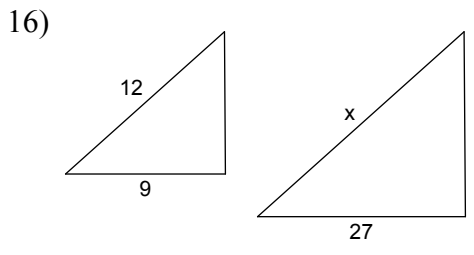
8



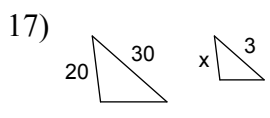
4



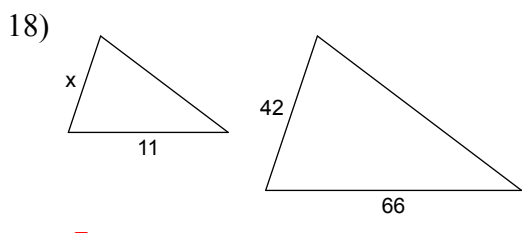
5



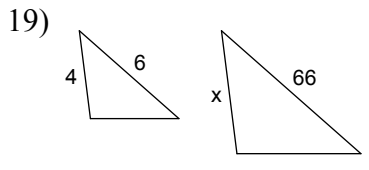
36



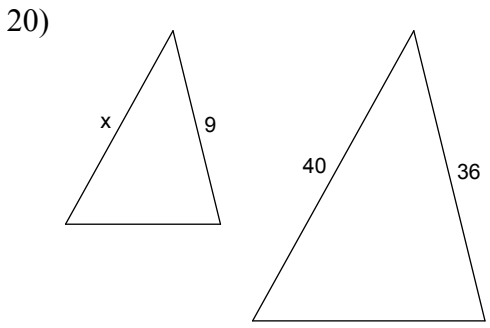
2



7



44



10